

















Name: _____

READY FOR A CHALLENGE?

Directions: Use your math skills to find the value of each symbol in the multiplication table below:

	13	15	17
	-26		-34
		-60	
	-78		

	<input type="text"/>		<input type="text"/>		<input type="text"/>
	<input type="text"/>		<input type="text"/>		<input type="text"/>
	<input type="text"/>		<input type="text"/>		

Key:



-2



-30



-102



-4



-52



-68

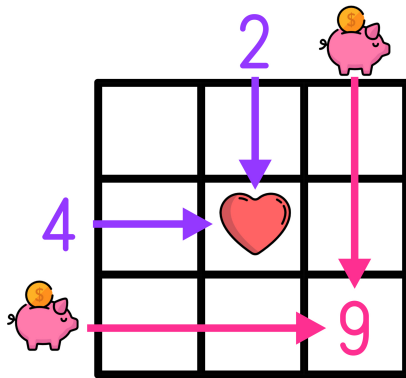


-6



-90

Multiplication tables work like a Bingo Board where each box represents the product of its corresponding column and row.



$$\text{heart} = 2 \times 4 \rightarrow \text{heart} = 8$$

$$9 = \text{piggy bank} \times \text{piggy bank} \rightarrow \text{piggy bank} = 3$$

