

















Name: _____

READY FOR A CHALLENGE?

Directions: Use your math skills to find the value of each symbol in the multiplication table below:

		-6	
3			18
-6	-72		
			

	<input type="text"/>		<input type="text"/>
	<input type="text"/>		<input type="text"/>
	<input type="text"/>		<input type="text"/>

Key:



12



-18



6



72

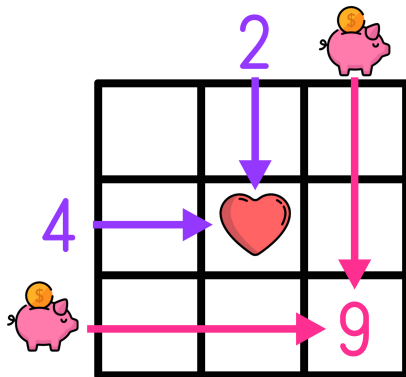


36



-36

Multiplication tables work like a Bingo Board where each box represents the product of its corresponding column and row.



$$\text{heart} = 2 \times 4 \rightarrow \text{heart} = 8$$

$$9 = \text{piggy bank} \times \text{piggy bank} \rightarrow \text{piggy bank} = 3$$

