












Name: \_\_\_\_\_

# READY FOR A CHALLENGE?

**Directions:** Use your math skills to find the value of each symbol in the multiplication table below:

	4		
2			8
			
		64	

					
<input type="text"/>	<input type="text"/>	<input type="text"/>	<input type="text"/>	<input type="text"/>	<input type="text"/>

Key:

**Popcorn=8**

**Popcorn Machine=4**

**Salt=32**

**Movie Tickets=32**

**Soda=16**

Multiplication tables work like a Bingo Board where each box represents the product of its corresponding column and row.

