















Name: _____

READY FOR A CHALLENGE?

Directions: Use your math skills to find the value of each symbol in the multiplication table below:

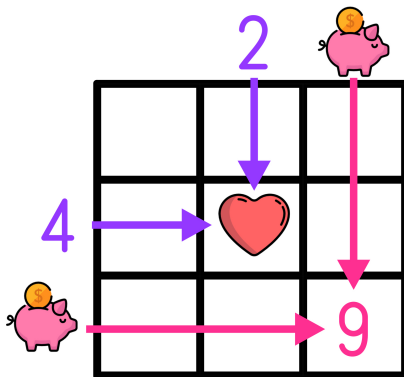
			
			
			
			
			
			

							
<input type="text"/>	<input type="text"/>	<input type="text"/>	<input type="text"/>	<input type="text"/>	<input type="text"/>	<input type="text"/>	<input type="text"/>

Key:

- Pikachu=-4
- Charmander=5
- Jigglypuff=5
- Snorlax=2
- Dratini=8
- Ratatat=-8
- Meowth=25
- Caterpillar=-20

Multiplication tables work like a Bingo Board where each box represents the product of its corresponding column and row.



$$\text{heart} = 2 \times 4 \rightarrow \text{heart} = 8$$

$$9 = \text{piggy bank} \times \text{piggy bank} \rightarrow \text{piggy bank} = 3$$