













Name: \_\_\_\_\_

# READY FOR A CHALLENGE?

**Directions:** Use your math skills to find the value of each symbol in the multiplication table below:

			6
20			
	27	81	
			



Key:

Bike=6

Extinguisher=3

Credit Card=54

Cart=1

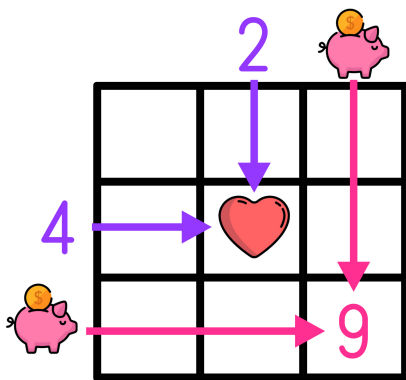
Camera=60

Ship=9

Gas Pump=120

WiFi=180

Multiplication tables work like a Bingo Board where each box represents the product of its corresponding column and row.



$$\text{heart} = 2 \times 4 \rightarrow \text{heart} = 8$$

$$9 = \text{piggy bank} \times \text{piggy bank} \rightarrow \text{piggy bank} = 3$$