








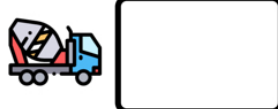


Name: _____

READY FOR A CHALLENGE?

Directions: Use your math skills to find the value of each symbol in the multiplication table below:

		9	
	18	54	
10			150
	45		



Key:

Tractor=3

Scooter=15

Cable Car=30

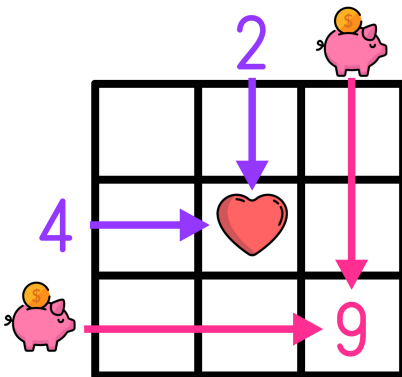
Bike=135

Concrete Truck=6

Plane=90

Ship=225

Multiplication tables work like a Bingo Board where each box represents the product of its corresponding column and row.



$$\text{heart} = 2 \times 4 \rightarrow \text{heart} = 8$$

$$9 = \text{piggy bank} \times \text{piggy bank} \rightarrow \text{piggy bank} = 3$$