









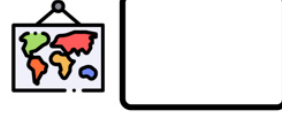


Name: \_\_\_\_\_

# READY FOR A CHALLENGE?

**Directions:** Use your math skills to find the value of each symbol in the multiplication table below:

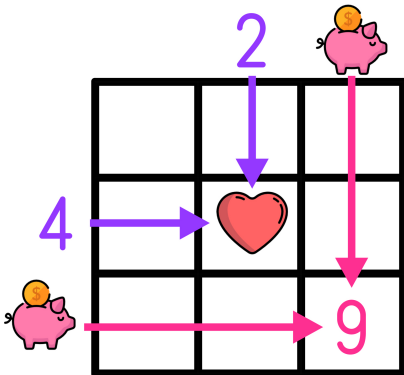
			
	35		
	49		
	63	81	108



Key:

- Volcano=7
- Earth=63
- Mountains=12
- Book=45
- Desert=9
- GPS=60
- Pyramids=5
- Map=84

Multiplication tables work like a Bingo Board where each box represents the product of its corresponding column and row.



$$\text{Heart} = 2 \times 4 \rightarrow \text{Heart} = 8$$

$$9 = \text{Piggy Bank} \times \text{Piggy Bank} \rightarrow \text{Piggy Bank} = 3$$