






Name: _____



Lines of Symmetry

Directions: Draw a line of symmetry through each figure that divides the figure into two equal and symmetrical parts. Some shapes have more than one line of symmetry.



ANSWER KEY

