






Name: _____

Date: _____



TWO TRUTHS & ONE LIE!

Use your math skills to determine which of the three statements below is a dirty lie! Explain how you made your decision.

Hobby	Total Minutes
 Hiking	19,825
 Knitting	4,439
 Photography	8,833
 Music	19,009
 Cooking	19,759

1. Photography was more popular than knitting, but less popular than music.
2. Hiking was more popular than music, but less popular than cooking.
3. More time was spent cooking than knitting and photography combined.

My Answer: _____

Key: 2