
















Name: \_\_\_\_\_

# HAPPY HAMBURGER DAY!

**Directions:** Use your math skills to find the value of each symbol in the multiplication table below:

	<b>1</b>		
		<b>40</b>	<b>400</b>
<b>7</b>		<b>70</b>	
	<b>13</b>		<b>1,300</b>

						
<input type="text"/>	<input type="text"/>	<input type="text"/>	<input type="text"/>	<input type="text"/>	<input type="text"/>	<input type="text"/>

Key:



Multiplication tables work like a Bingo Board where each box represents the product of its corresponding column and row.

