

















Name: _____

HAPPY GINGERBREAD HOUSE DAY!

Directions: Use your math skills to find the value of each symbol in the multiplication table below:

	3		
2			8
			
		36	24

					
<input type="text"/>	<input type="text"/>	<input type="text"/>	<input type="text"/>	<input type="text"/>	<input type="text"/>

Key:

Gingerbread House=6

Hot Cocoa=4

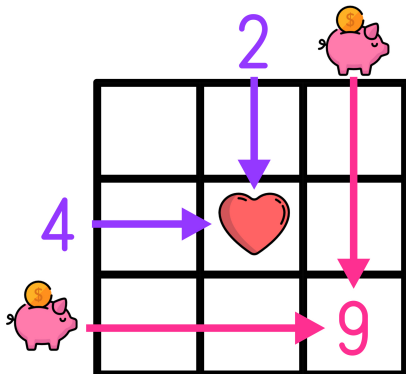
Gingerbread Man=12

Gumdrop=24

Candy Cane=16

Hard Candy=18

Multiplication tables work like a Bingo Board where each box represents the product of its corresponding column and row.



$$\text{♥} = 2 \times 4 \rightarrow \text{♥} = 8$$

$$9 = \text{piggy bank} \times \text{piggy bank} \rightarrow \text{piggy bank} = 3$$