

Name: \_\_\_\_\_

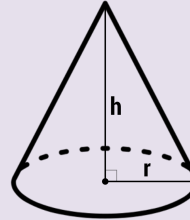
# Finding the Volume of a Cone



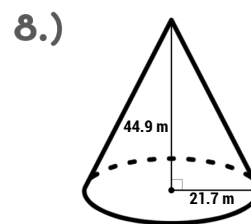
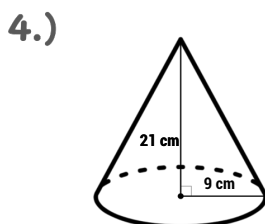
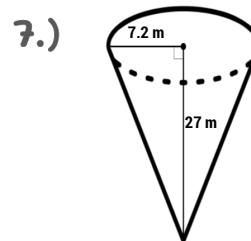
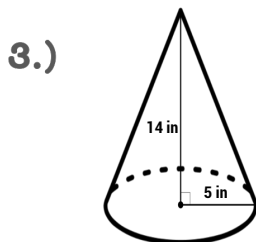
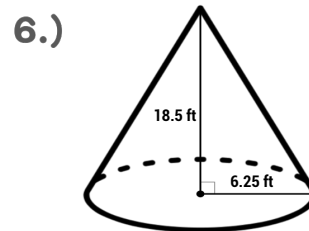
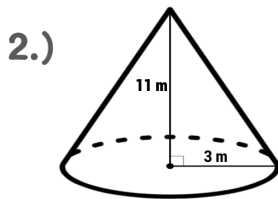
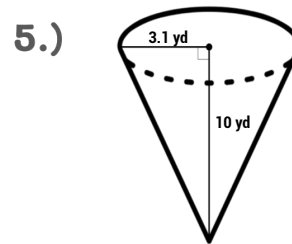
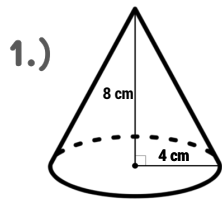
## Volume of a Cone Formula

$$V = \pi r^2 \frac{h}{3}$$

Where  $r$  is the radius of the base and  $h$  is the height.



**Directions:** Find the volume of each cone and round your answer to the nearest tenth.



## ANSWER KEY

- 1.)  $V = 134.0 \text{ cm}^3$
- 2.)  $V = 103.4 \text{ m}^3$
- 3.)  $V = 366.5 \text{ in}^3$
- 4.)  $V = 1,781.3 \text{ cm}^3$
- 5.)  $V = 100.6 \text{ yd}^3$
- 6.)  $V = 756.8 \text{ ft}^3$
- 7.)  $V = 1,465.7 \text{ m}^3$
- 8.)  $V = 22,140.9 \text{ m}^3$