

Name: \_\_\_\_\_

Date: \_\_\_\_\_






# TWO TRUTHS & ONE LIE!

Use your math skills to determine which of the three statements below is a dirty lie! Explain how you made your decision.

 = 4     = 3     = 7.2     = 5

1)  × 10<sup></sup> = 7,200

2) 8<sup></sup> × 8<sup></sup> = 8<sup>12</sup>

3) <sup>2</sup> + <sup>2</sup> = <sup>2</sup>

My Answer: \_\_\_\_\_

Key: 2