




Name: _____

Elapsed Time-C



Directions: Determine the new time and draw the hands on the clock.





What time will it be in
zero hours and thirty minutes?





What time will it be in
two hours and zero minutes?



What time will it be in
one hour and thirty minutes?



What time will it be in
four hours and fifteen minutes?



What time will it be in
zero hours and forty-five minutes?

