




Name: \_\_\_\_\_

# Elapsed Time-B



Directions: Determine the new time and draw the hands on the clock.





What time will it be in three hours and zero minutes?





What time will it be in two hours and zero minutes?



What time will it be in six hours and zero minutes?



What time will it be in four hours and zero minutes?



What time will it be in eight hours and zero minutes?

