




Name: _____

Elapsed Time-B



Directions: Determine the new time and draw the hands on the clock.





What time will it be in **three and zero minutes?**





What time will it be in **two hours and zero minutes?**



What time will it be in **six hours and zero minutes?**



What time will it be in **four hours and zero minutes?**



What time will it be in **eight hours and zero minutes?**

