




Name: \_\_\_\_\_

# Elapsed Time-A



**Directions:** Determine the new time and draw the hands on the clock.





What time will it be in **one hour and zero minutes?**





What time will it be in **one hour and zero minutes?**



What time will it be in **two hours and zero minutes?**



What time will it be in **two hours and zero minutes?**



What time will it be in **three hours and zero minutes?**

