

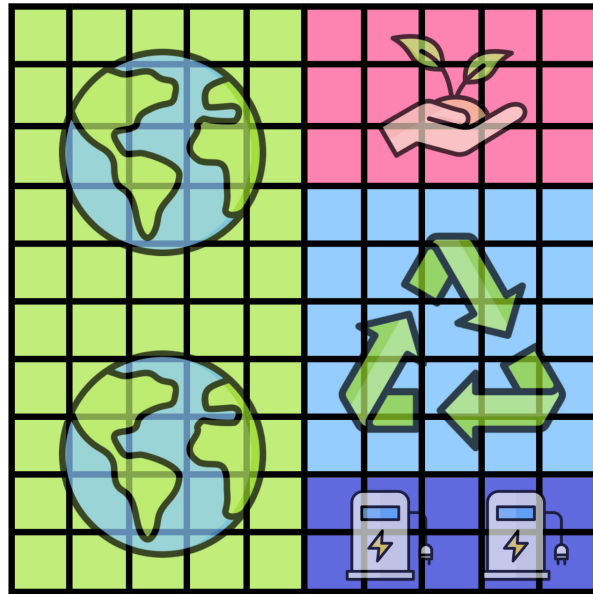
Name: _____




Date: _____



TWO TRUTHS & ONE LIE!

Use your math skills to determine which of the three statements below is a dirty lie! Explain how you made your decision.



1. The  region is 50% of the whole figure.
2. The  region is 0.25 of the whole figure.
3. The  region is $\frac{1}{15}$ of the whole figure.

My Answer: _____

Key: 3