

Name: \_\_\_\_\_

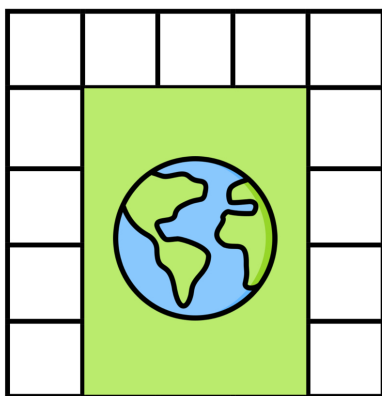
Date: \_\_\_\_\_



# TWO TRUTHS & ONE LIE!


Use your math skills to determine which of the three statements below is a dirty lie! Explain how you made your decision.

1.



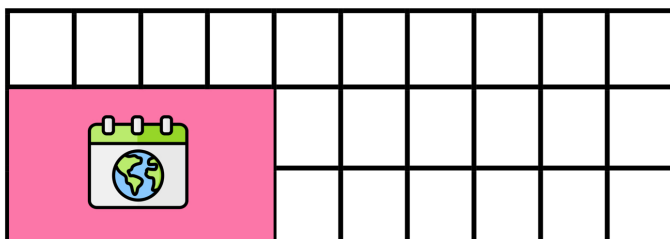
The shaded region has an area of 12 square units.

2.



The shaded region and the non-shaded region have the same area.

3.



The non-shaded region has an area of 8 square units.

My Answer: \_\_\_\_\_

Key: 3