

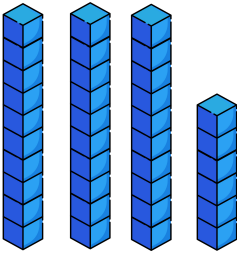
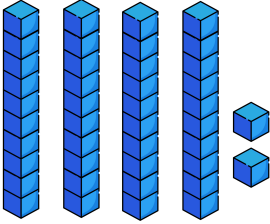
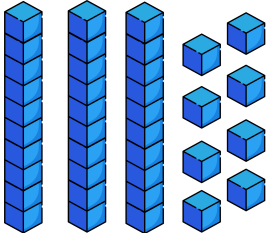
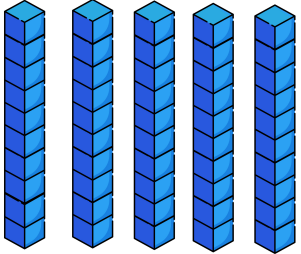
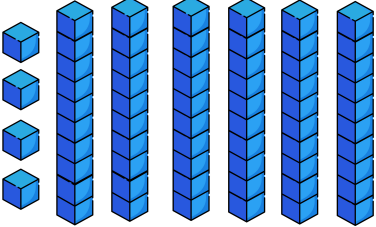
Name: _____

Counting Using Base Ten Blocks (B)

Directions: Complete the table below. The first example has been completed for you.

Blocks	Tens	Ones	Total
	<u>3</u> tens	+ <u>6</u> ones	= <u>36</u>
	_____ tens	+ _____ ones	= _____
	_____ tens	+ _____ ones	= _____
	_____ tens	+ _____ ones	= _____
	_____ tens	+ _____ ones	= _____

ANSWER KEY

Blocks	Tens		Ones		Total
	<u>3</u> tens	+	<u>6</u> ones	=	36
	<u>4</u> tens	+	<u>2</u> ones	=	42
	<u>3</u> tens	+	<u>8</u> ones	=	38
	<u>5</u> tens	+	<u>0</u> ones	=	50
	<u>6</u> tens	+	<u>4</u> ones	=	64