
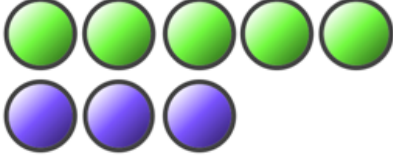

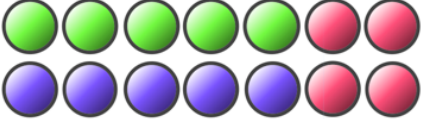






Name: \_\_\_\_\_

# Practice Counting Up to 20

Directions: Count how many of each object is in each group.

<b>GROUP</b>	<b>HOW MANY?</b>
1.) 	
2.) 	
3.) 	
4.) 	
5.) 	
6.) 	
7.) 	
8.) 	

## **ANSWER KEY**

- 1.) 5
- 2.) 8
- 3.) 10
- 4.) 14
- 5.) 15
- 6.) 17
- 7.) 19
- 8.) 20