

Name: _____

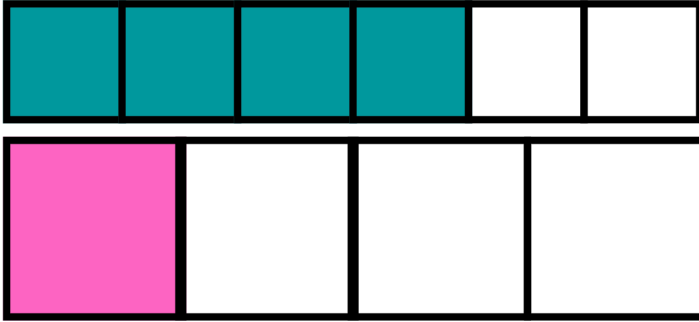
Comparing Fractions

Directions: Circle the fraction that is SMALLER.

1.		$\frac{4}{8}$ $\frac{1}{4}$
2.		$\frac{6}{8}$ $\frac{4}{6}$
3.		$\frac{6}{8}$ $\frac{4}{6}$
4.		$\frac{1}{4}$ $\frac{1}{3}$

ANSWER KEY

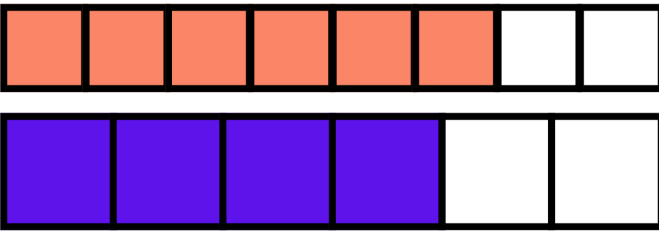
1.



$$\frac{4}{8}$$

$$\frac{1}{4}$$

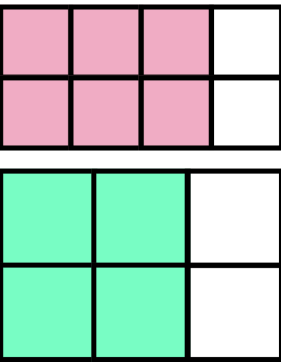
2.



$$\frac{6}{8}$$

$$\frac{4}{6}$$

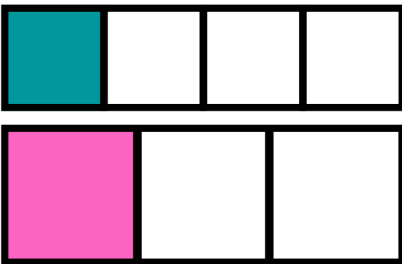
3.



$$\frac{6}{8}$$

$$\frac{4}{6}$$

4.



$$\frac{1}{4}$$

$$\frac{1}{3}$$