

Name: _____



Classifying Quadrilaterals

Directions: Classify each quadrilateral, as specifically as possible, as a square, rectangle, rhombus, parallelogram, or trapezoid.


1.



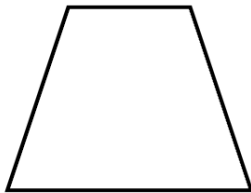
4.



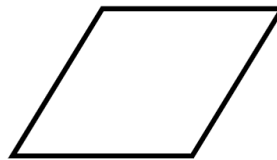
7.



2.



5.



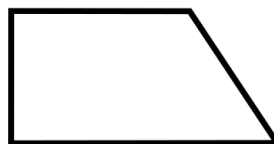
8.



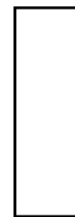
3.



6.




9.



ANSWER KEY

1.




rectangle

4.



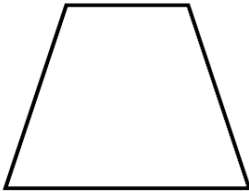
square

7.



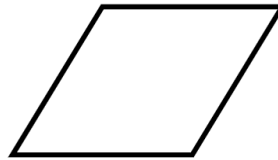
trapezoid

2.



trapezoid

5.



rhombus

8.



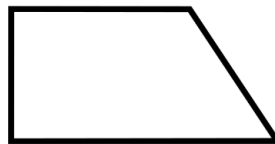
parallelogram

3.




parallelogram

6.



trapezoid

9.



rectangle