





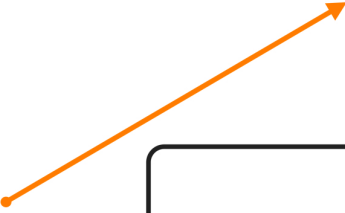





Name: _____













Classifying Lines, Line Segments, and Rays (A)

Directions: Identify each of the following as a line, line segment, or ray.

 <input data-bbox="313 541 678 646" type="text"/>	 <input data-bbox="932 541 1297 646" type="text"/>
 <input data-bbox="313 846 678 951" type="text"/>	 <input data-bbox="919 846 1284 951" type="text"/>
 <input data-bbox="378 1073 743 1178" type="text"/>	 <input data-bbox="1008 1024 1373 1129" type="text"/>
 <input data-bbox="418 1472 784 1577" type="text"/>	 <input data-bbox="919 1461 1284 1566" type="text"/>
 <input data-bbox="407 1776 773 1881" type="text"/>	 <input data-bbox="992 1640 1357 1745" type="text"/>

ANSWER KEY

 line	 ray
 line segment	 ray
 line	 line segment
 ray	 line
 line segment	 line