




Name: _____

Date: _____



TWO TRUTHS & ONE LIE!

Use your math skills to determine which of the three statements below is a dirty lie! Explain how you made your decision.

If  = 5,  = -7, &  = -3,

then each of the following equations are true.

$$1) -25 = \frac{8}{5} \left(\text{sombrero} \right) - 33$$

$$2) 9 \left(\text{maracas} - 17 \right) = 72 \left(\text{pinata} \right)$$

$$3) 14 \left(\text{pinata} \right) - \text{maracas} = \text{pinata} \left(\text{maracas} \times -1 \right)$$

My Answer: _____

Key: 3