




Name: _____




Date: _____






TWO TRUTHS & ONE LIE!

Use your math skills to determine which of the three statements below is a dirty lie! Explain how you made your decision.

 = $7\frac{3}{5}$  = $8\frac{1}{5}$  = $6\frac{4}{5}$

1)  +  =  + 9

2) $1 <$  - 



My Answer: _____

Key: 2