

Name: _____











CHOCOLATE CAKE DAY!


Chocolate Cake Day is a deliciously tempting holiday that invites everyone to indulge in the rich, decadent delights of chocolate cake, celebrating one of the most beloved and versatile desserts in a variety of styles and recipes.

Directions: Use your math skills to find the value of each symbol in the multiplication table below:

			12
8	24		
			108
7		63	

	<input type="text"/>		<input type="text"/>		<input type="text"/>
	<input type="text"/>		<input type="text"/>		<input type="text"/>
	<input type="text"/>		<input type="text"/>		

Answer Key:



Multiplication tables work like a Bingo Board where each box represents the product of its corresponding column and row.

