

Name: _____

Date: _____



TWO TRUTHS & ONE LIE!

Use your math skills to determine which of the three statements below is a dirty lie! Explain how you made your decision.



$= 9$






$= 17$



$= 50$

1) The sum of  and 
doubled equals 

2) Three times the sum of  and  is 201.

3) Triple the sum of  and  is not 179.

My Answer: _____

Key: 1