

Name: _____










HAPPY BAKING DAY!




World Baking Day, celebrated on May 19th, is a day for people around the globe to embrace the joy of baking, whether they are seasoned pros or first-timers, and to share their homemade creations with friends, family, and the community.

Directions: Use your math skills to find the value of each symbol in the multiplication table below:

			
4	24		
			64
12		84	

	<input type="text"/>		<input type="text"/>		<input type="text"/>
	<input type="text"/>		<input type="text"/>		<input type="text"/>
	<input type="text"/>		<input type="text"/>		<input type="text"/>

Answer Key:



Multiplication tables work like a Bingo Board where each box represents the product of its corresponding column and row.

