

Name: _____


HAPPY BAKING DAY!







World Baking Day, celebrated on May 19th, is a day for people around the globe to embrace the joy of baking, whether they are seasoned pros or first-timers, and to share their homemade creations with friends, family, and the community.


Directions: Find the value of each symbol in the area model below so that the entire box represents the value:

1,134



			
<input type="text"/>	<input type="text"/>	<input type="text"/>	<input type="text"/>

Answer Key: 42×27



Area Models work like a Bingo Board where each box represents the product of its corresponding column and row and the sum of all four inner boxes represents the total.

