

Name: _____


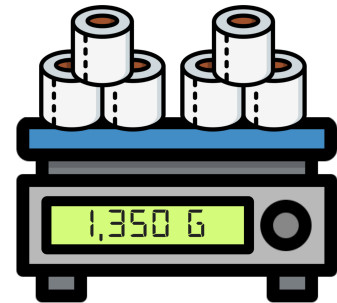


Date: _____



READY FOR A CHALLENGE?

Directions:

Find the value of each item on the scales below:



Key:

3 TPS's=675g

1 TP=225g

Plant=2,175g

Lamp=453g