


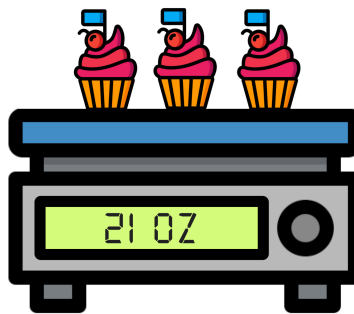
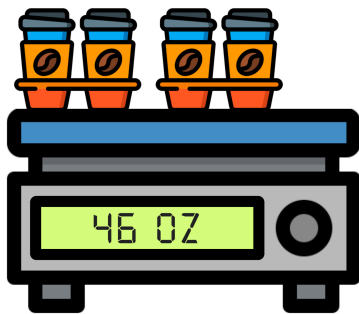
Name: _____

Date: _____



READY FOR A CHALLENGE?

Directions: Find the value of each symbol in the diagram below.



Key:

Cupcake=7oz

Coffees=23oz

Slice of Pie=16oz