

Name: _____





Date: _____









TWO TRUTHS & ONE LIE!

Use your math skills to determine which of the three statements below is a dirty lie! Explain how you made your decision.

$$\text{Astronaut} = 9 \quad \text{Planet} = 6 \quad \text{Rocket} = 3$$

1  =  +  + 

2  +  = 

3  =  - 

My Answer: _____

Key: 3