
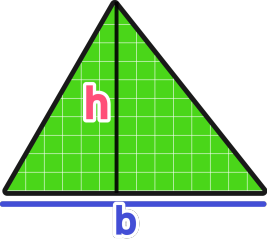


Name: _____



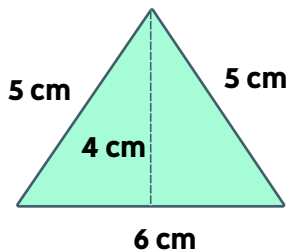
AREA OF TRIANGLES

Formula Reference


$$A = \frac{1}{2}bh$$

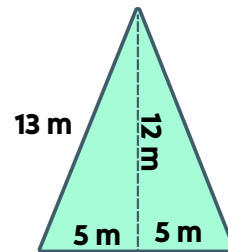
Directions: Use a formula to find the area of each figure below.

1.)



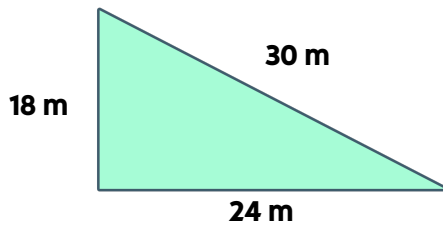
A = _____

4.)



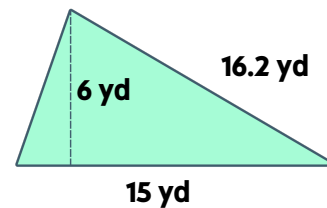
A = _____

2.)



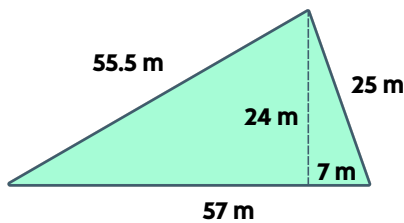
A = _____

5.)



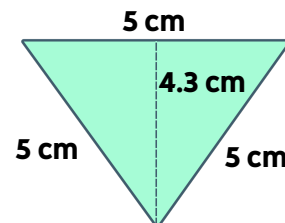
A = _____

3.)



A = _____

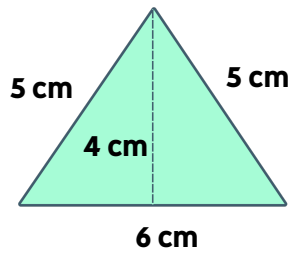
6.)



A = _____

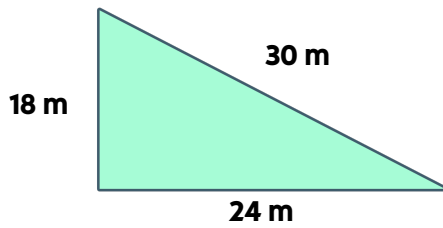
ANSWER KEY

1.)



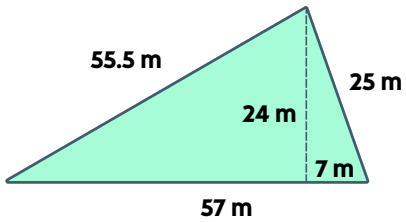
$$A = 12 \text{ cm}^2$$

2.)



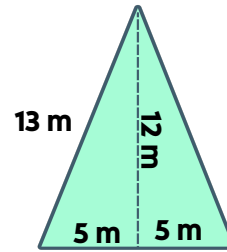
$$A = 216 \text{ m}^2$$

3.)



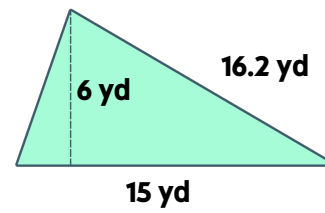
$$A = 684 \text{ m}^2$$

4.)



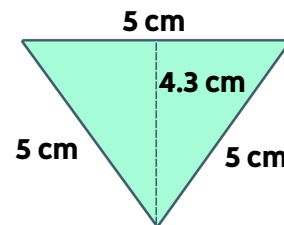
$$A = 60 \text{ m}^2$$

5.)



$$A = 45 \text{ yd}^2$$

6.)



$$A = 10.75 \text{ cm}^2$$