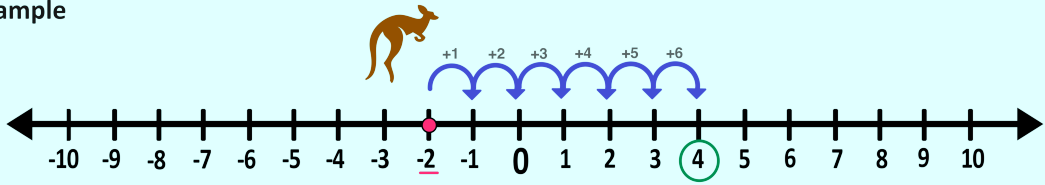


Name: _____



Adding and Subtracting Integers Using Number Lines

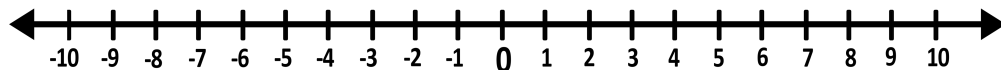
Example



-2 + 6 = 4

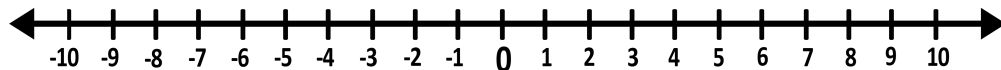
Directions: Solve each of the following using a number line.

1.)



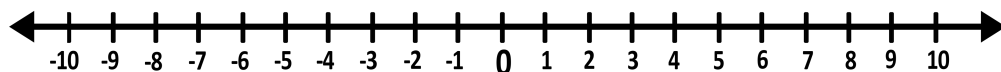
-1 + 7 = _____

2.)



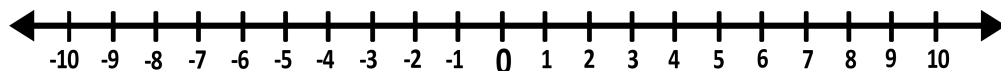
3 - 8 = _____

3.)



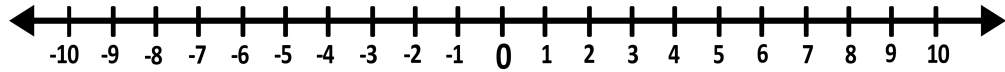
-3 - 5 = _____

4.)



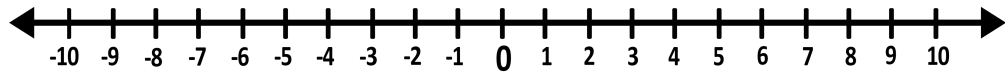
7 - 7 = _____

5.)



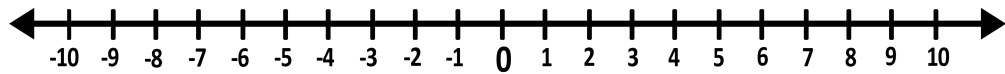
$$-9 + 8 = \underline{\hspace{2cm}}$$

6.)



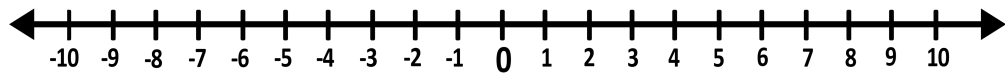
$$-7 + 5 = \underline{\hspace{2cm}}$$

7.)



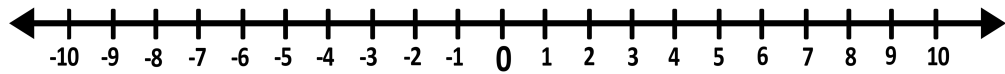
$$-7 + 11 = \underline{\hspace{2cm}}$$

8.)



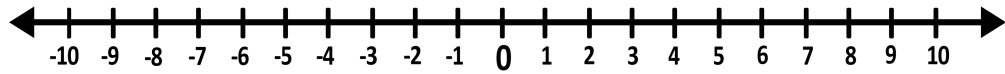
$$1 - 9 = \underline{\hspace{2cm}}$$

9.)



$$0 - 6 = \underline{\hspace{2cm}}$$

10.)



$$4 - 8 = \underline{\hspace{2cm}}$$

ANSWER KEY

01.) $-1 + 7 = \underline{6}$

02.) $3 - 8 = \underline{-5}$

03.) $-3 - 5 = \underline{-8}$

04.) $7 - 7 = \underline{0}$

05.) $-9 + 8 = \underline{-1}$

06.) $-7 + 5 = \underline{-2}$

07.) $-7 + 11 = \underline{4}$

08.) $1 - 9 = \underline{-8}$

09.) $0 - 6 = \underline{-6}$

10.) $4 - 8 = \underline{-4}$