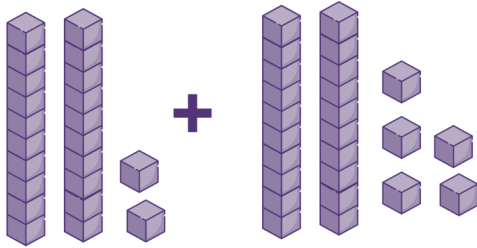


Name: _____

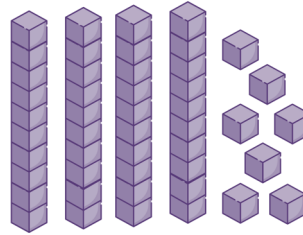
Adding Using Base Ten Blocks (B)

Directions: Complete the table below. The first example has been completed for you.

$22 + 25$



Diagram



4 tens

7 ones

47

$43 + 21$

Diagram

___ tens

___ ones

$66 + 15$

Diagram

___ tens

___ ones

$37 + 25$

Diagram

___ tens

___ ones

$56 + 40$

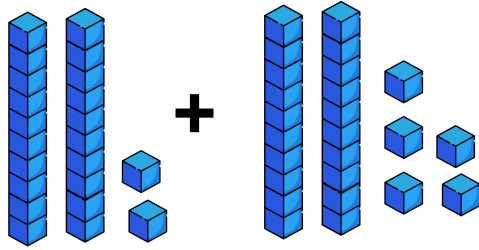
Diagram

___ tens

___ ones

ANSWER KEY

$$22 + 25$$



= 4 tens

= 7 ones

47

$$43 + 21$$

= 6 tens

= 4 ones

64

$$66 + 15$$

= 8 tens

= 1 ones

81

$$37 + 25$$

= 6 tens

= 2 ones

62

$$56 + 40$$

= 9 tens

= 6 ones

96