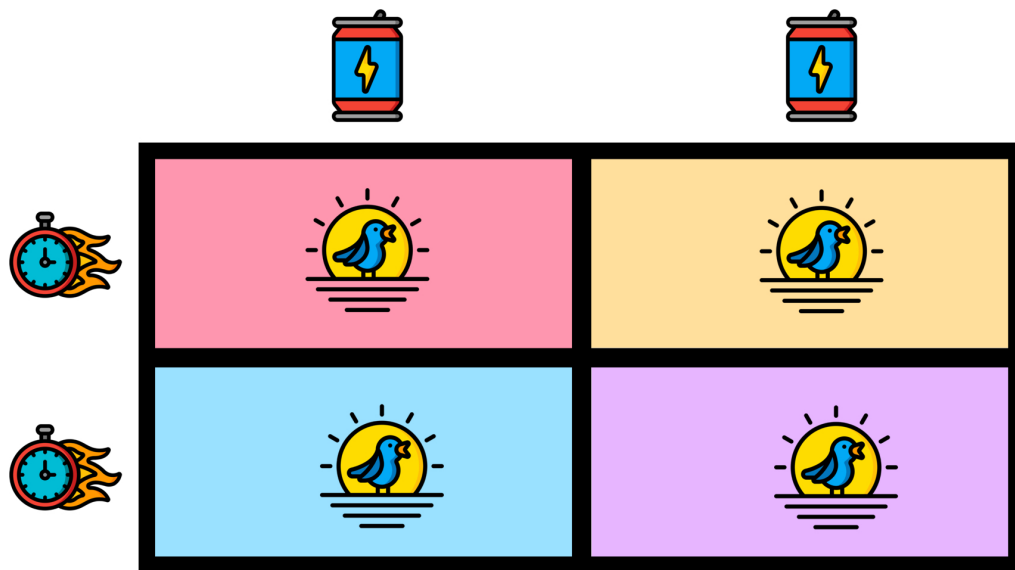





Name: _____

READY FOR A CHALLENGE?

Directions: Find the value of each symbol in the area model below so that the entire box represents the value:

200



		
<input type="text"/>	<input type="text"/>	<input type="text"/>

Key: $20 \times 10 = 200$

Can=10

Clock=5

Early Bird=50

Area Models work like a Bingo Board where each box represents the product of its corresponding column and row and the sum of all four inner boxes represents the total.

