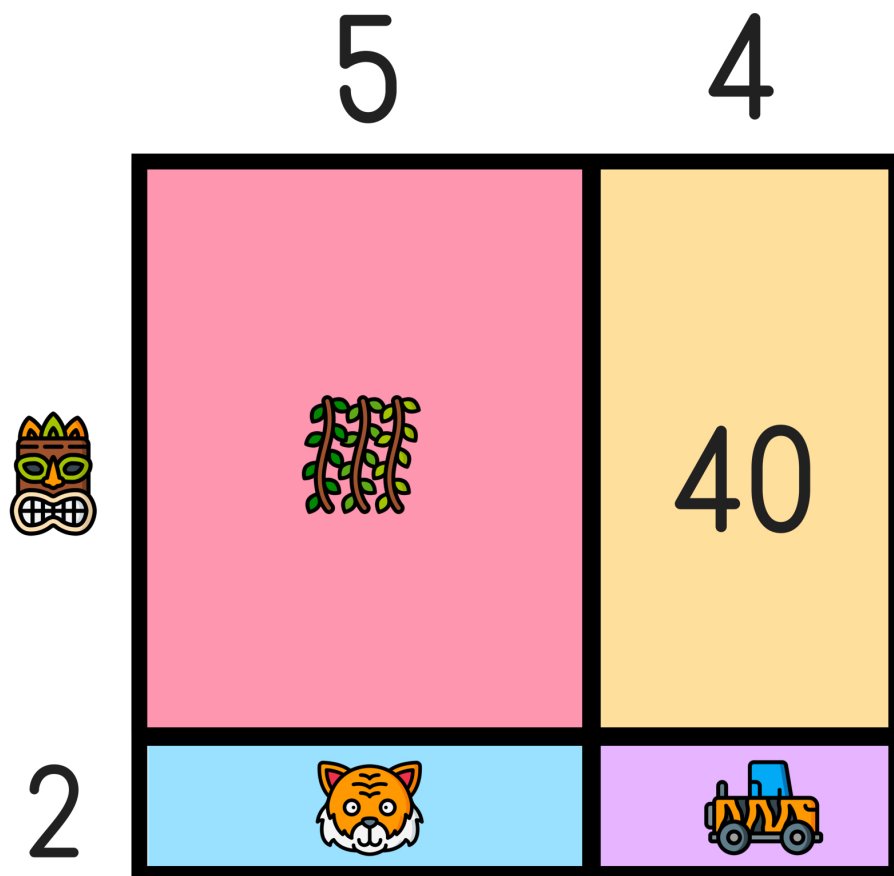






Name: \_\_\_\_\_

# READY FOR A CHALLENGE?

**Directions:** Find the value of each symbol in the area model below so that the entire box represents the value:

108



			
<input type="text"/>	<input type="text"/>	<input type="text"/>	<input type="text"/>

Key:  $9 \times 12 = 108$

Tiki Guy=10

Vines=50

Tiger=10

Truck=8

Area Models work like a Bingo Board where each box represents the product of its corresponding column and row and the sum of all four inner boxes represents the total.

