











Name: \_\_\_\_\_

# READY FOR A CHALLENGE?

**Directions:** Find the value of each symbol in the area model below so that the entire box represents the value:

9,100

		
		
41		

		
<input type="text"/>	<input type="text"/>	<input type="text"/>

Key:  $100 \times 91$

Burger=50  
Corgi=2,500  
Apple=2,050

Area Models work like a Bingo Board where each box represents the product of its corresponding column and row and the sum of all four inner boxes represents the total.

