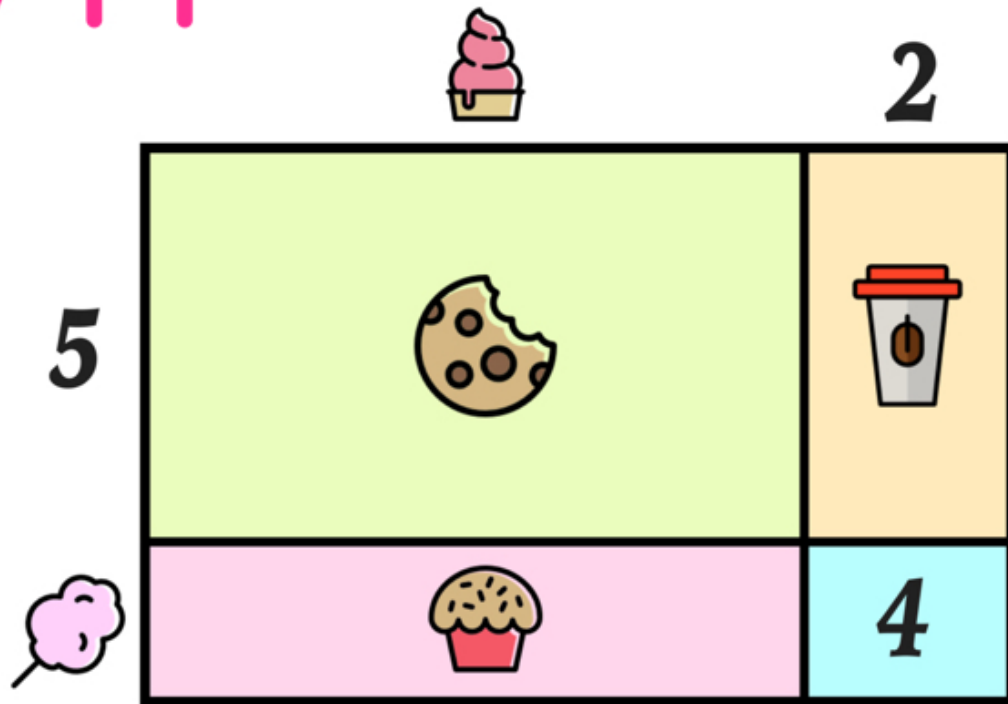





Name: _____

READY FOR A CHALLENGE?

Directions: Find the value of each symbol in the area model below so that the entire box represents the value:

714



| | | | | |
|---|---|---|--|---|
|  |  |  |  |  |
| <input type="text"/> | <input type="text"/> | <input type="text"/> | <input type="text"/> | <input type="text"/> |

Key:

102x7

Cupcake=100

Cotton Candy=2

Cookie=500

Coffee=10

Muffin=200

Area Models work like a Bingo Board where each box represents the product of its corresponding column and row and the sum of all four inner boxes represents the total.

