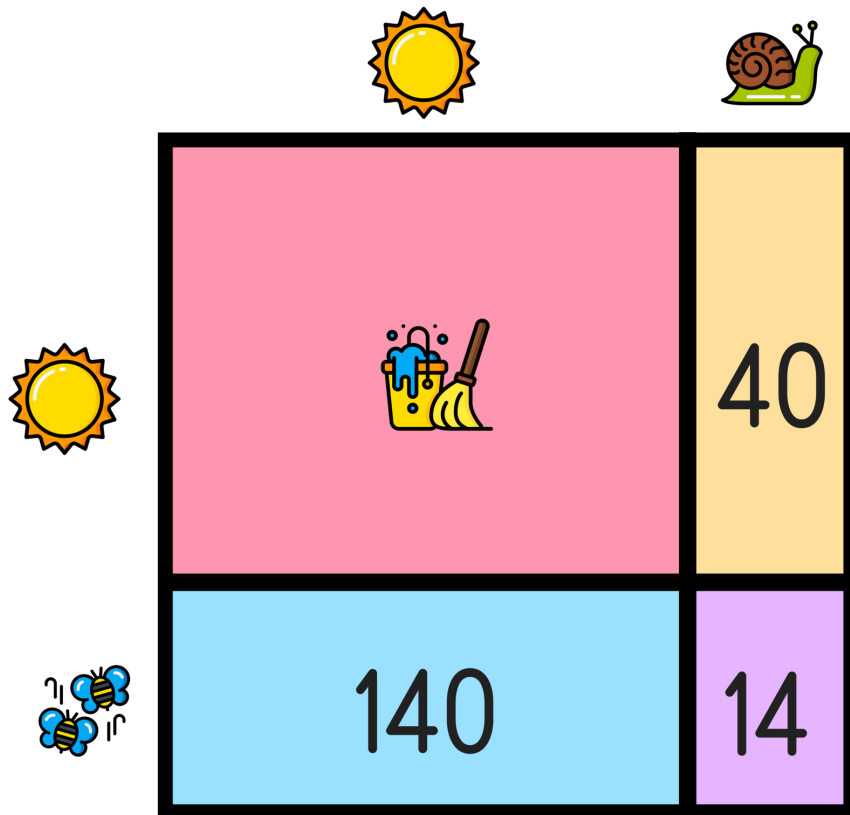






Name: _____

READY FOR A CHALLENGE?

Directions: Find the value of each symbol in the area model below so that the entire box represents the value:

594



			
<input type="text"/>	<input type="text"/>	<input type="text"/>	<input type="text"/>

Key:

22x27
Sun=20
Mop=400
Snail=2
Bees=7

Area Models work like a Bingo Board where each box represents the product of its corresponding column and row and the sum of all four inner boxes represents the total.

