


Name: \_\_\_\_\_




# Happy 90's Day!

90's Day, celebrated on March 31<sup>st</sup>, the 90<sup>th</sup> day of the year, is a nostalgic celebration of the 1990s, inviting people to reminisce and relive the unique fashion, music, pop culture, and trends that defined this vibrant and transformative decade.

## TWO TRUTHS & ONE LIE!

Use your math skills to determine which of the three statements below is a fib! Explain how you made your decision.



- A) The  region is 40% of the whole figure.
- B) The  region is greater than 0.30 of the whole figure.
- C) The  region is  $\frac{1}{12}$  of the whole figure.

My Answer: \_\_\_\_\_

Answer Key: C