





Name: _____

Happy 90's Day!

90's Day, celebrated on March 31st, the 90th day of the year, is a nostalgic celebration of the 1990s, inviting people to reminisce and relive the unique fashion, music, pop culture, and trends that defined this vibrant and transformative decade.

TWO TRUTHS & ONE LIE!

Use your math skills to determine which of the three statements below is a fib! Explain how you made your decision.

 = 7	 = 5
 = 35	 = 24

A) The ratios  :  and  : 1 are equivalent.

B) The ratios  :  and 1 :  are equivalent.

C) The ratios 15 :  and  :  are not equivalent.

My Answer: _____

Answer Key: A