

Name: _____

Happy 90's Day!


90's Day, celebrated on March 31st, the 90th day of the year, is a nostalgic celebration of the 1990s, inviting people to reminisce and relive the unique fashion, music, pop culture, and trends that defined this vibrant and transformative decade.

TWO TRUTHS & ONE LIE!



Use your math skills to determine which of the three statements below is a fib! Explain how you made your decision.

A)  6 →  = 29

$\underbrace{\hspace{10em}}_{35}$

B) 12  12 →  = 11

$\underbrace{\hspace{10em}}_{35}$

C) 17  →  = 19

$\underbrace{\hspace{10em}}_{35}$

My Answer: _____

Answer Key: C