

Name: _____





Date: _____



TWO TRUTHS & ONE LIE!

Use your math skills to determine which of the three statements below is a dirty lie! Explain how you made your decision.

 = 6.025  = 1.0  = $\frac{2}{300}$  = 100%

	Fraction	Decimal	Percent
(1)	$6\frac{1}{4}$		625%
(2)	$\frac{1}{1}$		
(3)		0.00 $\overline{6}$	$\frac{2}{3}\%$

My Answer: _____

Key: 1