


Name: _____


Date: _____




TWO TRUTHS & ONE LIE!






Use your math skills to determine which of the three statements below is a dirty lie! Explain how you made your decision.

 = 3.5

 = 3.5%

 = .035

 = $\frac{1}{8}$

	Fraction	Decimal	Percent
(1)		0.125	12.5%
(2)	$3\frac{1}{2}$		
(3)	$\frac{7}{200}$		

My Answer: _____

Key: 2