

Name: _____


Date: _____



TWO TRUTHS & ONE LIE!



Use your math skills to determine which of the three statements below is a dirty lie! Explain how you made your decision.

Sack of
Gummy Bears



(1) The probability of selecting a  or a  is 1.

(2) The probability of selecting a  is 0.

(3) The probability of selecting a  and the probability of selecting a  are equal.

My Answer: _____

Key: 3