


Name: _____

Date: _____





TWO TRUTHS & ONE LIE!

Use your math skills to determine which of the three statements below is a dirty lie! Explain how you made your decision.



(1) The  region is 50% of the whole figure.

(2) The  region is 0.25 of the whole figure.

(3) The  region is $\frac{1}{10}$ of the whole figure.

My Answer: _____

Key: 3