


Name: _____



Date: _____






TWO TRUTHS & ONE LIE!

Use your math skills to determine which of the three statements below is a dirty lie! Explain how you made your decision.



(1)  +  = $\frac{5}{9}$

(2)  = $\frac{1}{2}$

(3)  +  = $\frac{2}{3}$

My Answer: _____

Key: 2