

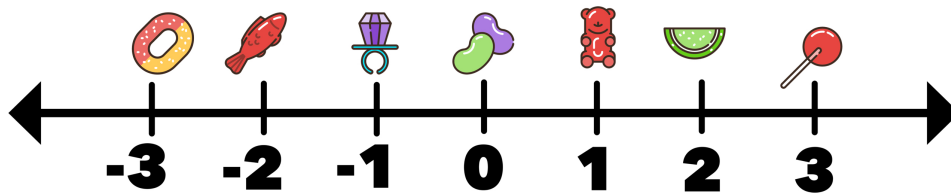
Name: _____

Date: _____






TWO TRUTHS & ONE LIE!

Use your math skills to determine which of the three statements below is a dirty lie! Explain how you made your decision.



1)  and  are both two units away from  on the number line.

2)  <  - 

3)  and  are both the same distance from  on the number line.

My Answer: _____

Key: 3